


Name _____ Date _____

Weather Instruments

1. What does a thermometer measure?

- (a) Wind direction
- (b) Temperature
- (c) Rainfall
- (d) Air pressure



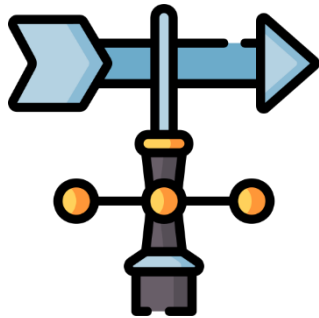
2. Which instrument measures how much rain has fallen?

- (a) Barometer
- (b) Thermometer
- (c) Rain Gauge
- (d) Wind Vane



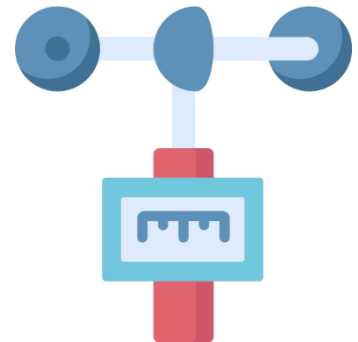
3. What tool helps us know which direction the wind is blowing?

- (a) Anemometer
- (b) Wind Vane
- (c) Thermometer
- (d) Rain Gauge



4. Which weather instrument is used to measure wind speed?

- (a) Thermometer
- (b) Rain Gauge
- (c) Barometer
- (d) Anemometer



5. A barometer is used to measure what?

- (a) Wind speed
- (b) Temperature
- (c) Air pressure
- (d) Rainfall



6. What do meteorologists use weather instruments for?

- (a) To observe the weather
- (b) To decorate schools
- (c) To cook food
- (d) To make music

