



Name \_\_\_\_\_ Date \_\_\_\_\_

**Identify Plant Structures and their Purposes**


1. What is the main job of the roots?

- (a) Soak up water and hold the plant
- (b) Catch sunlight
- (c) Grow flowers
- (d) Make seeds



2. Which plant part helps make food using sunlight?

- (a) Roots
- (b) Stem
- (c) Leaves
- (d) Flowers




3. What is the purpose of the stem?

- (a) To hold the plant and carry water
- (b) To trap insects
- (c) To make fruit
- (d) To absorb sunlight




4. Why do plants have flowers?

- (a) To make seeds and attract insects
- (b) To help the plant breathe
- (c) To help the plant grow tall
- (d) To soak up water



5. What do seeds grow into?

- (a) A branch
- (b) Another seed
- (c) A leaf
- (d) A new plant



6. Which part protects the seed and helps it spread?

- (a) Root
- (b) Stem
- (c) Fruit
- (d) Leaf

