


Name _____ Date _____

Weather Instruments

1. What does a thermometer measure?

- (a) Wind direction
 (b) **Temperature**
 (c) Rainfall
 (d) Air pressure



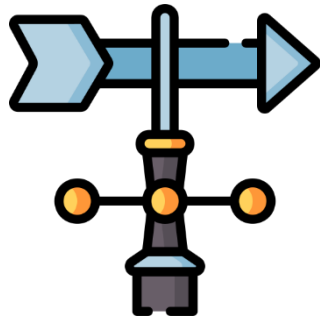
2. Which instrument measures how much rain has fallen?

- (a) Barometer
 (b) Thermometer
 (c) **Rain Gauge**
 (d) Wind Vane



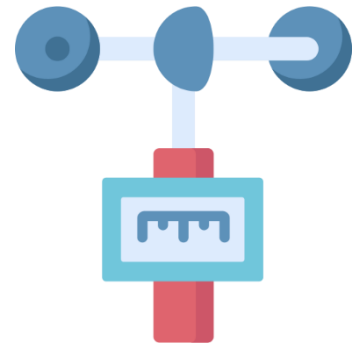
3. What tool helps us know which direction the wind is blowing?

- (a) Anemometer
 (b) **Wind Vane**
 (c) Thermometer
 (d) Rain Gauge



4. Which weather instrument is used to measure wind speed?

- (a) Thermometer
 (b) Rain Gauge
 (c) Barometer
 (d) **Anemometer**



5. A barometer is used to measure what?

- (a) Wind speed
 (b) Temperature
 (c) **Air pressure**
 (d) Rainfall



6. What do meteorologists use weather instruments for?

- (a) **To observe the weather**
 (b) To decorate schools
 (c) To cook food
 (d) To make music

