



Name _____ Date _____

Identify Plant Structures and their Purposes


1. What is the main job of the roots?

- (a) Soak up water and hold the plant
 (b) Catch sunlight
 (c) Grow flowers
 (d) Make seeds



2. Which plant part helps make food using sunlight?

- (a) Roots
 (b) Stem
 (c) Leaves
 (d) Flowers



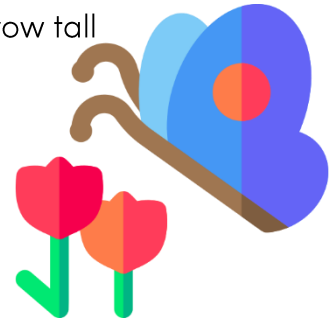
3. What is the purpose of the stem?

- (a) To hold the plant and carry water
 (b) To trap insects
 (c) To make fruit
 (d) To absorb sunlight




4. Why do plants have flowers?

- (a) To make seeds and attract insects
 (b) To help the plant breathe
 (c) To help the plant grow tall
 (d) To soak up water



5. What do seeds grow into?

- (a) A branch
 (b) Another seed
 (c) A leaf
 (d) A new plant



6. Which part protects the seed and helps it spread?

- (a) Root
 (b) Stem
 (c) Fruit
 (d) Leaf

