


Weather and Climate

Name _____ Date _____

Weather Instruments

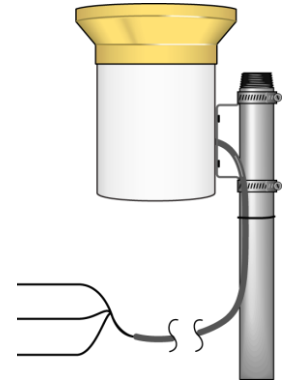
1. What does an anemometer measure?

- (a) Temperature
- (b) Wind speed
- (c) Air pressure
- (d) Rainfall



2. Which instrument is used to measure rainfall?

- (a) Rain gauge
- (b) Thermometer
- (c) Barometer
- (d) Wind vane




3. What tool is used to measure air pressure?

- (a) Anemometer
- (b) Barometer
- (c) Rain gauged
- (d) Thermometer




4. Which weather instrument shows the direction of the wind?

- (a) Wind vane
- (b) Anemometer
- (c) Barometer
- (d) Thermometer



5. What does a hygrometer measure?

- (a) Wind speed
- (b) Air pressure
- (c) Humidity
- (d) Rainfall



6. What is the purpose of a weather radar?

- (a) To measure temperature
- (b) To detect rainfall and storms
- (c) To measure wind speed
- (d) To measure humidity




Answer Key

Name _____ Date _____

Weather Instruments

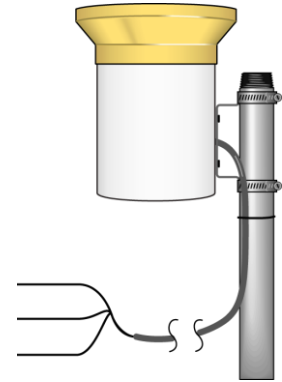
1. What does an anemometer measure?

- (a) Temperature
- (b) Wind speed**
- (c) Air pressure
- (d) Rainfall



2. Which instrument is used to measure rainfall?

- (a) Rain gauge**
- (b) Thermometer
- (c) Barometer
- (d) Wind vane




3. What tool is used to measure air pressure?

- (a) Anemometer
- (b) Barometer**
- (c) Rain gauged
- (d) Thermometer




4. Which weather instrument shows the direction of the wind?

- (a) Wind vane**
- (b) Anemometer
- (c) Barometer
- (d) Thermometer



5. What does a hygrometer measure?

- (a) Wind speed
- (b) Air pressure
- (c) Humidity**
- (d) Rainfall



6. What is the purpose of a weather radar?

- (a) To measure temperature
- (b) To detect rainfall and storms**
- (c) To measure wind speed
- (d) To measure humidity

