

Weather and Climate

Name _____ Date _____

Weather Chart

1. What is a weather chart used for?

- (a) To predict the future
- (b) To show different types of clouds
- (c) To display current and upcoming weather conditions
- (d) To show animals in different seasons




2. Which symbol on a weather chart usually represents rain?

- (a) A sun
- (b) A cloud with raindrops
- (c) A snowflake
- (d) A thermometer



3. What does a thermometer symbol on a weather chart show?

- (a) Wind speed
- (b) Cloud cover
- (c) Temperature
- (d) Rainfall



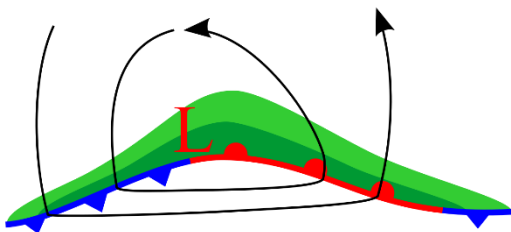
4. How is a cold front usually shown on a weather chart?

- (a) A blue line with triangles
- (b) A red line with circles
- (c) A yellow line with squares
- (d) A green line with dots



5. What do the H and L symbols represent on a weather chart?

- (a) Humidity and Light
- (b) High and Low temperatures
- (c) High and Low pressure systems
- (d) Heavy and Light rain



6. What does the snowflake symbol on a weather chart indicate?

- (a) Fog
- (b) Snow
- (c) Rain
- (d) Wind



Answer Key

Name _____ Date _____

Weather Chart

1. What is a weather chart used for?

- (a) To predict the future
- (b) To show different types of clouds
- (c) To display current and upcoming weather conditions
- (d) To show animals in different seasons




2. Which symbol on a weather chart usually represents rain?

- (a) A sun
- (b) A cloud with raindrops
- (c) A snowflake
- (d) A thermometer



3. What does a thermometer symbol on a weather chart show?

- (a) Wind speed
- (b) Cloud cover
- (c) Temperature
- (d) Rainfall



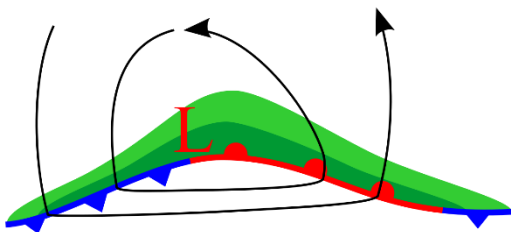
4. How is a cold front usually shown on a weather chart?

- (a) A blue line with triangles
- (b) A red line with circles
- (c) A yellow line with squares
- (d) A green line with dots



5. What do the H and L symbols represent on a weather chart?

- (a) Humidity and Light
- (b) High and Low temperatures
- (c) High and Low pressure systems
- (d) Heavy and Light rain



6. What does the snowflake symbol on a weather chart indicate?

- (a) Fog
- (b) Snow
- (c) Rain
- (d) Wind

