

Measuring Mass

Name _____ Date _____

Estimating Grams and Kilograms



Choose the best estimate for each object or animal shown.

1.



- 18 grams
- 4 kilograms
- 8 kilograms

2.



- 20 grams
- 500 grams
- 18 kilograms

3.




- 900 grams
- 9 kilograms
- 90 kilograms

4.



- 960 grams
- 18 kilograms
- 3 kilograms

5.



- 570 grams
- 7 kilograms
- 37 kilograms

6.




- 3 grams
- 300 grams
- 3 kilograms

7.




- 100 grams
- 1 kilogram
- 100 kilograms

8.



- 1 gram
- 50 grams
- 1 kilogram

9.



- 6,000 grams
- 600 kilograms
- 60,000 kilograms

Answer Key

Name _____ Date _____

Estimating Grams and Kilograms



Choose the best estimate for each object or animal shown.

1.



18 grams
4 kilograms
8 kilograms

2.



20 grams
500 grams
18 kilograms

3.



900 grams
9 kilograms
90 kilograms

4.



960 grams
18 kilograms
3 kilograms

5.



570 grams
7 kilograms
37 kilograms

6.




3 grams
300 grams
3 kilograms

7.




100 grams
1 kilogram
100 kilograms

8.



1 gram
50 grams
1 kilogram

9.



6,000 grams
600 kilograms
60,000 kilograms