

Circumference

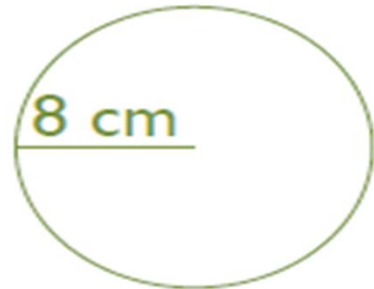
Name

Calculate the circumference of each circle.

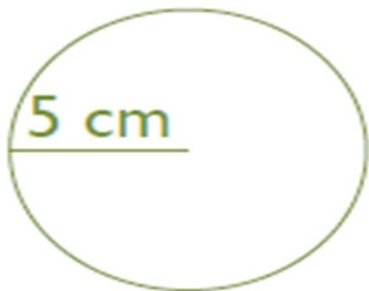
1.



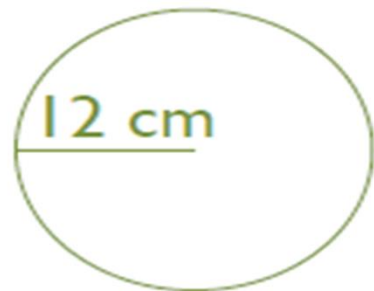
2.



3.



4.



5.



6.



Answer Key

Name

Calculate the circumference of each circle.

1.



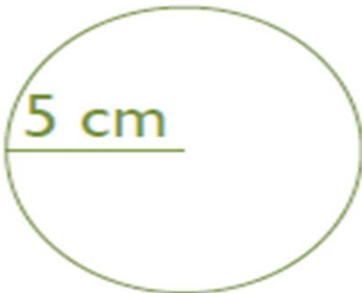
$C=43.96 \text{ cm}$

2.



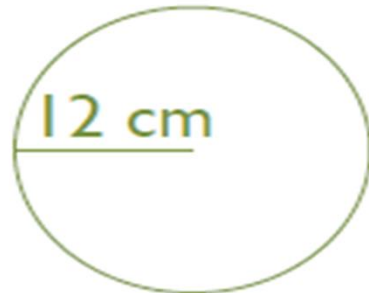
$C=50.24 \text{ cm}$

3.



$C=31.40 \text{ cm}$

4.



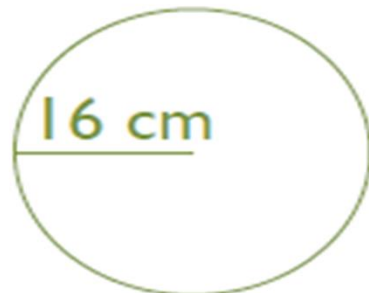
$C=75.36 \text{ cm}$

5.



$C=69.08 \text{ cm}$

6.



$C=100.48 \text{ cm}$