




Identifying Fractions

Name

Color the fraction.


1. $\frac{2}{3} =$ 


2. $\frac{2}{5} =$ 

3. $\frac{1}{2} =$ 


4. $\frac{7}{8} =$ 


5. $\frac{1}{6} =$ 


6. $\frac{1}{2} =$ 

7. $\frac{4}{5} =$ 

8. $\frac{5}{8} =$ 

9. $\frac{1}{4} =$ 

10. $\frac{1}{3} =$ 


11. $\frac{1}{5} =$ 

12. $\frac{1}{3} =$ 

Answer Key

Name

Color the fraction.


1. $\frac{2}{3} =$ 

2. $\frac{2}{5} =$ 

3. $\frac{1}{2} =$ 


4. $\frac{7}{8} =$ 


5. $\frac{1}{6} =$ 

6. $\frac{1}{2} =$ 

7. $\frac{4}{5} =$ 

8. $\frac{5}{8} =$ 

9. $\frac{1}{4} =$ 

10. $\frac{1}{3} =$ 

11. $\frac{1}{5} =$ 

12. $\frac{1}{3} =$ 